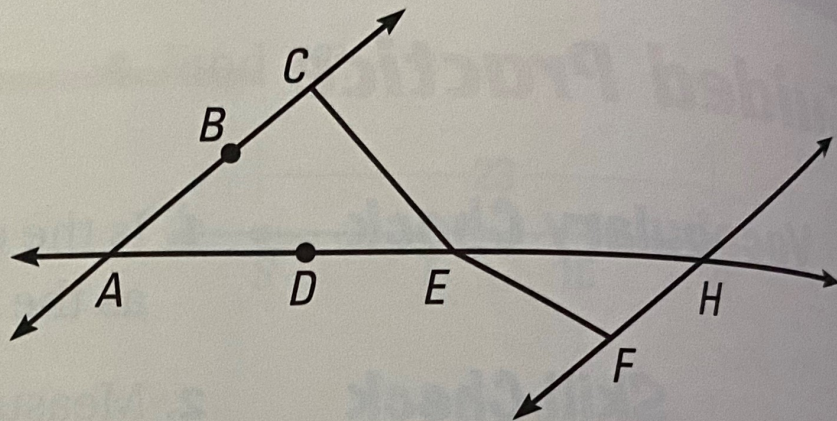




You be the Judge


Use the diagram to determine whether the statement is *true* or *false*.

- 17. B is between A and C .
- 18. E is between C and F .
- 19. E is between D and H .
- 20. D is between A and H .
- 21. C is between B and E .




Segment Addition Postulate Find the length.


22. Find PR .




23. Find SU .



24. Find MN .



25. Find JK .



26. **Fishing** Use the photograph to determine the difference in length